



Year 6 isolation activities

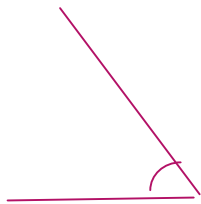
25TH NOVEMBER 2020

ANGLES STARTER

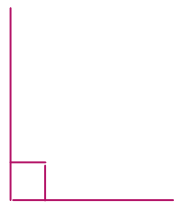
Acute Obtuse Reflex Right-angled

What sort of angles are these?


a)




b)



c)



d)

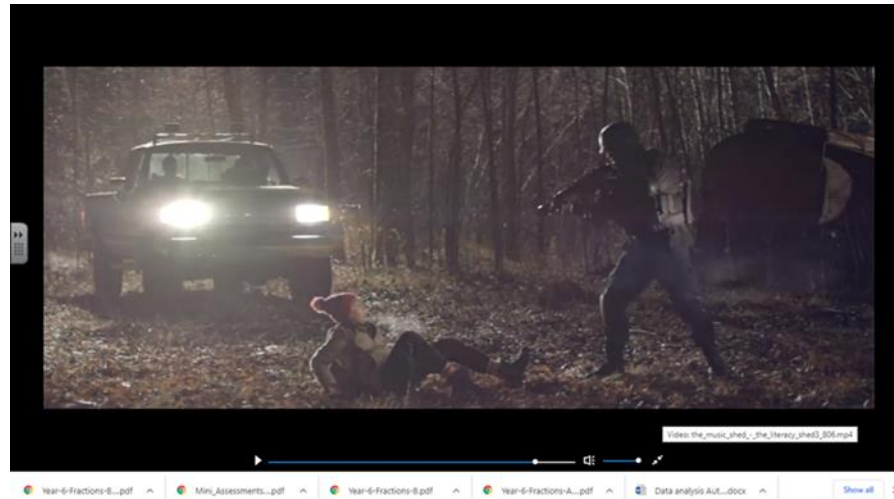


Literacy Titanium story

- ▶ Watch the Titanium film again on the link below
<https://www.literacyshed.com/the-music-video-shed.html>

Titanium story

- ▶ Then write a description of the setting shown in the picture below – make sure that you use as much descriptive language as you can - try to use similes, personification, alliteration and metaphor as well.



Maths missing angles



Missing angles on a straight line

- ▶ Remember that a straight line = 180 degrees

Have a go at the attached worksheet

Reading



**Make sure that you spend between 15 and 30 mins reading independently.
You can do AR quizzes at home. I will be looking to see how you are doing.**



Have fun and stay safe

