



# Year 6 isolation activities

7<sup>TH</sup> OCTOBER 2020

# Morning activity (answers on next page)


1)  $84,300 - 44,300$

2) Round 7,199 to the nearest 1,000

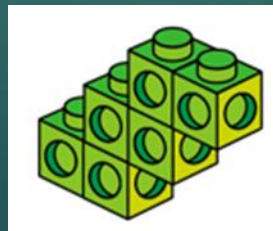
3) Write 7,984,002 in words

4) Which shape has a greater volume?

A



B





# Literacy

## The Holocaust

- ▶ Please watch the Holocaust PowerPoint on the website – think about the questions on slides 6, 7 and 8.
- ▶ Then look at the rest of the slides including the link to the bbc website on Holocaust victims.



# Radio interview

- ▶ Later in the week, we will be writing a radio interview with one of the kinder transport children described on the website below – you will need to click on the pictures in the gallery. Choose one of the children and make notes about them – you will need to include their name, when and where they were born, what happened to them and their family and why.
- ▶ [http://www.bbc.co.uk/history/worldwars/genocide/holocaust\\_survivors\\_gallery.shtml](http://www.bbc.co.uk/history/worldwars/genocide/holocaust_survivors_gallery.shtml)

# Written Multiplication

$$\begin{array}{r} 45 \\ \times 16 \\ \hline 270 \\ 3 \\ \hline 450 \\ \hline 720 \\ \hline 1 \end{array}$$

Do  $45 \times 6$  first – carry the 3 of 30 below the line

Do the  $10 \times 45$ , remembering to be a hero and add a zero first

Add the two numbers together to get the final answer

# Written multiplication

► Solve these calculations

(1)  $49 \times 26$

(2)  $62 \times 34$

(3)  $79 \times 45$

(4)  $82 \times 53$

(5)  $126 \times 13$

(6)  $258 \times 15$

(7)  $329 \times 18$

(8)  $428 \times 26$






# Reading



Make sure that you spend between 15 and 30 mins reading independently. You can do AR quizzes at home. I will be looking to see how you are doing.



Have fun and stay safe

